



## QUESTION PAPER

---

### PERIODIC TEST

CLASS	SECTION	EXAM CODE
4	A	3249551
4	B	3249561

---

### SCHOOL

HIM Academy Public School

- 
1. There are 20 questions in the paper. All are compulsory.
  2. Tick or circle the option which is your answer.
  3. Show your working on a separate sheet of paper wherever you need to.
  4. Please check your answers carefully before submitting the test. Once submitted, the answers CANNOT be changed.



**Q: 1 Which of the following can be affected by water pollution?**

- 1** only rivers
- 2** only rivers and lakes
- 3** only rivers and oceans
- 4** all - rivers, lakes and oceans

**Q: 2 Sudha and her friends took drinking water from the pot shown below, using different methods as follows:**



**Sudha: by opening the tap to fill her glass**

**Zakir: by using a big clean spoon with a long handle to take out water from the top of the pot to fill his glass**

**Samuel: by using his hand for dipping a glass of water into the pot, from the top, to fill his glass**

**Whose method was MOST LIKELY to make the drinking water in the pot dirty?**

- 1** only Sudha
- 2** only Zakir
- 3** only Samuel
- 4** none of them

**Q: 3 Which of these can cause serious water pollution in a lake?**

- 1** factory waste dumped into the lake
- 2** frogs and snakes that live in the lake
- 3** dried up plant parts floating on water
- 4** use of many rowing boats by the tourists

**Q: 4 Four friends were talking about the effects of water pollution. This is what they said:**

**Tom: "The number of types of plants is likely to increase."**

**Adil: "The number of animals may decrease."**

**Gaurav: "There will be less drinking water available."**

**Prannoy: "People are more likely to fall ill."**

**Who is/are correct?**

- 1** only Tom
- 2** only Tom and Adil
- 3** only Gaurav and Prannoy
- 4** only Adil, Gaurav and Prannoy



Q: 5



What is this picture showing?

- 1** pollution of water
- 2** shortage of petrol
- 3** wastage of drinking water
- 4** shortage of water due to less rainfall

Q: 6 Dairy products are produced from the milk obtained from which of the following animals?

cows, goats, sheep, camels

- 1** only cows
- 2** only cows and goats
- 3** only cows, goats and sheep
- 4** all - cows, goats, sheep and camels

Q: 7 Which of the following will definitely have a harmful effect on the growth of crops?

- 1** water
- 2** weeds
- 3** sunlight
- 4** fertilizers

Q: 8 How are foods like fish kept fresh until the buyer takes it home to cook?

- 1** by putting it in hot water
- 2** by storing it in a cool place
- 3** by keeping it in a closed room
- 4** by making sure no light falls on it

Q: 9 Shown below are Madhu's family members, together doing something. Madhu's family are \_\_\_\_\_.



- 1** potters
- 2** hunters
- 3** farmers
- 4** fishermen



**Q: 10** You have planted a bean seed in the soil. Write the following events in the order in which they happen.

- P. the first root coming out
- Q. putting the seed in the soil
- R. the first two leaves coming out
- S. watering the seed

- 1** Q-P-R-S                      **2** Q-P-S-R                      **3** S-P-Q-R                      **4** Q-S-P-R

**Q: 11** At the market, Vaishali arranges different vegetables in piles on sack cloth spread out on the ground.

Which of the following vegetables is likely to spoil the **FASTEST** by getting dried up by the sun?

- 1** ladyfinger                      **2** pumpkin                      **3** potatoes                      **4** onions

**Q: 12** In which of the following do vegetable sellers usually pack and bring large quantities of vegetables from the *mandi* (wholesale market)?

- 1** buckets                      **2** paper bags                      **3** cotton bags                      **4** gunny bags

**Q: 13** While sorting the vegetables to sell in the market, which of the following are likely to be kept aside to be sold later?

- 1** the fully ripe vegetables                      **2** the not fully ripe vegetables  
**3** the vegetables that are large in size                      **4** the vegetables that are small in size

**Q: 14** Why was Vaishali's family able to sort the vegetables in a short time?

- 1** because only one person sorted the vegetables  
**2** because there was only one type of vegetable  
**3** because there were very few vegetables  
**4** because everyone in the family helped

**Q: 15** Farmer Manu has a crop of twenty sacks of potatoes. What is the best vehicle he should buy to transport the potatoes, that he grows in his fields, to the wholesale market in the next town?

- 1** a motorbike                      **2** a cycle                      **3** a van                      **4** a car



**Q: 16** Hens use their feet to scratch the dirt for worms and insects. They have feet with 4 toes, each having strong nails for digging into the ground. Which of these could be the foot of a hen?

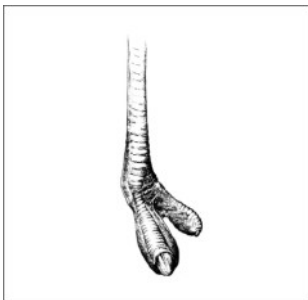
**1**




**2**



**3**




**4**




**Q: 17** Which bird beak would be most helpful for a bird that catches tiny insects found in the small gaps of the bark of trees?


**1**



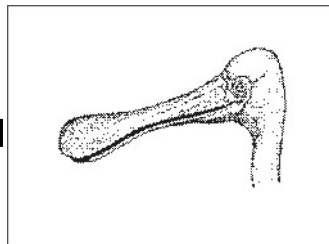
**2**



**3**



**4**



**Q: 18** Which of the following animals swallow their food whole without chewing?

**1** leopard

**2** snake

**3** goat

**4** fox



**Q: 19** Which bird builds a nest like the one shown below?



**1** sparrow

**2** crow

**3** pigeon

**4** weaver bird

**Q: 20** Which of the following animals has sharp and pointed front teeth that help them to eat food?



End of Questions in Paper

**This page has no questions and is left blank intentionally.**

**This page has no questions and is left blank intentionally.**