



QUESTION PAPER

PERIODIC TEST

CLASS	SECTION	EXAM CODE
3	A	3249531
3	B	3249541

SCHOOL

HIM Academy Public School

-
1. There are 20 questions in the paper. All are compulsory.
 2. Tick or circle the option which is your answer.
 3. Show your working on a separate sheet of paper wherever you need to.
 4. Please check your answers carefully before submitting the test. Once submitted, the answers CANNOT be changed.



Q: 1 Who among the following professionals wears a black coat to work everyday?

- 1** driver **2** lawyer **3** postman **4** bus driver

Q: 2 Sneha wants to send some items to her brother in Canada. Which of the following places in the neighbourhood must she visit to send the items?

- 1** newspaper office **2** police station
3 fire station **4** post office

Q: 3 Who among these persons repairs cars and scooters?

- 1** plumber **2** electrician **3** mechanic **4** carpenter

Q: 4 Asma's father is a travel ticket examiner. Which of the following is likely to be his place of work?

- 1** post office **2** cinema hall
3 railway station **4** amusement park

Q: 5 Who among the following people is trained to provide first aid and treat sick students in a school?

- 1** the nurse **2** the principal
3 the class teacher **4** the older students

Q: 6 The man shown in the image is a _____.



- 1** goldsmith **2** carpenter **3** weaver **4** potter

Q: 7 Geeta is blind. Which of the following activities is she LEAST LIKELY to do because of her blindness?

- 1** choosing a perfume **2** listen to the radio
3 drive a car in traffic **4** sing a song



Q: 8 Which of the following about an object will you be able to find out **ONLY** if you see it?

- 1** shape **2** smoothness **3** colour **4** smell

Q: 9 Radha and Jack are friends. Radha can use all her senses properly. But Jack cannot speak. He makes signs with his hands to express what he thinks or wants.



Which organ does Radha use to understand what Jack is trying to express?

- 1** eyes **2** nose **3** ears **4** skin

Q: 10 Which sense organ helps in sensing a shining metal coin on the playing ground?

- 1** nose **2** eyes **3** ears **4** tongue

Q: 11 In a game of cricket, the person who has to **BAT** uses which sense organs the most?

- 1** eyes **2** ears **3** skin **4** nose

Q: 12



The picture seen here shows a system of writing called Braille. Books in Braille can be read by feeling the raised dots with the tips of our fingers. For whom will this way of reading be MOST useful?

- 1** people who cannot see **2** people who cannot hear
3 people who cannot speak **4** people who cannot move their limbs



Q: 13 Dhanya blindfolded David and gave him two boxes. One box was smooth, square and covered with blue paper. The other box was rough, round and covered with white paper with a word written on it.

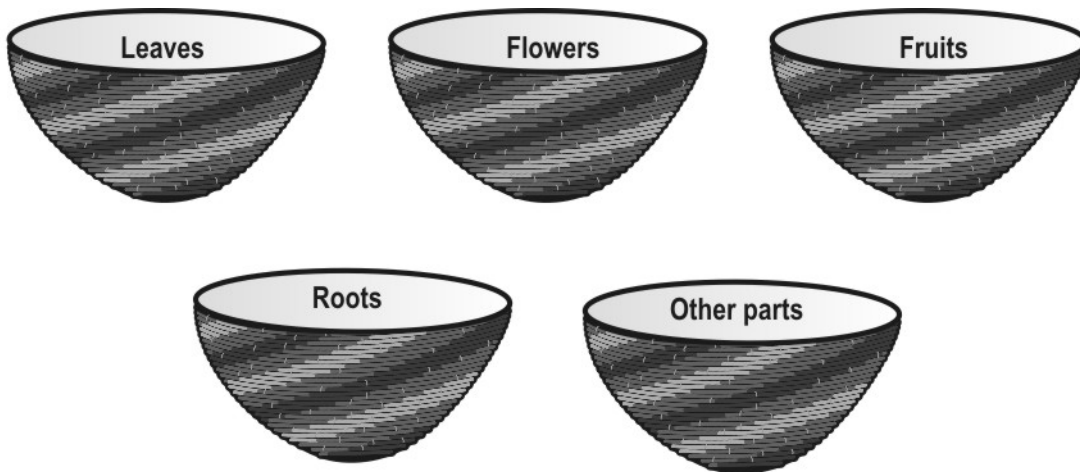
Which of the following questions will David be able to answer about the boxes?

- 1** Which box is blue?
- 2** Which box is square?
- 3** Which box had a word written on it?
- 4** (He will not be able to answer any of the questions with his eyes blindfolded.)

Q: 14 The leaves of which of the following plants are usually eaten as vegetables?

- 1** green peas
- 2** spinach
- 3** tomato
- 4** potato

There are many parts of a plant that we eat. Answer the following questions given below, based on this.



Q: 15 Where would you place 'cabbage'?

- 1** in the "Leaves" basket
- 2** in the "Flowers" basket
- 3** in the "Fruits" basket
- 4** in the "Roots" basket

Q: 16 Which of the following would you place in the 'other parts' basket?

- 1** carrot
- 2** tomato
- 3** rice
- 4** spinach

Q: 17 What is made from sugar cane?

- 1** sugar
- 2** oil
- 3** furniture
- 4** spice powder

Q: 18 - I am a food item.
 - I am grown in fields.
 - People generally roast me or boil me before eating.

Who am I?

- 1** fish
- 2** corn
- 3** orange
- 4** pineapple



Q: 19 Some fruits are eaten with their skin on and some are eaten after removing the skin.

Swati has made two lists of fruits, eaten with or without skin.

Which fruit has she put in the wrong list?

Fruits eaten with skin	Fruits eaten without skin
Guava	Orange
Pineapple	Custard Apple
Grapes	Pomegranate



1 Custard Apple

2 Grapes

3 Pomegranate

4 Pineapple

Q: 20 From which of these animals do we get honey?



End of Questions in Paper

This page has no questions and is left blank intentionally.

This page has no questions and is left blank intentionally.

This page has no questions and is left blank intentionally.